



وزارة التربية والتعليم  
الإدارة المركزية لتطوير المناهج  
مكتب مستشار الرياضيات

**برعاية معالي وزير التربية والتعليم**

**السيد الأسناذ / محمد عبد اللطيف**

ونوجيهات مساعد الوزير لشئون تطوير المناهج التعليمية  
والمشرف علي الإدارة المركزية لتطوير المناهج

**د / أكرم حسن**

إشراف علمي  
مستشار الرياضيات

**أ / منال عزقول**

**إدعاءات ونقييمات لمنهج الرياضيات**

للفص الأول الابتدائي  
للعام الدراسي 2024 / 2025  
إعداد

**أ / صباح عبد الواحد**  
مراجعة

**أ / فردوس محي**

**أ / إسلام يسري**

ترجمة

**أ / صباح عبد الواحد**  
مراجعة الترجمة  
**أ / محمود سليمان نظيم**

الرياضيات - الصف الأول - الأسبوع الثاني - (تقييم اسبوعي) - ترم 2


**( Group 1 )**

**1-Complete:**

There are  flowers outside the vase  
and  flowers inside the vase.



**2- Complete with (above ore below) :**



- The ball is  the table.
- The cat is  the table.

**3-**

Circle the item which matches the given position, start from the arrow.

6th

2nd


4-

Use the following pictures, write (✓) to the correct statement and (X) to the incorrect statement.



- The order of the cat is the fifth. ( )
- The seventh animal is the lion. ( )


**5- Write the amount for the follwing:**




( Group 2 )

1-Complete:

There are  pencils inside the pencil box  
and  pencils outside the pencil box.






2- Complete with (above ore below) :






- The vase is  the table.
- The keyboard is  the table.

3-

Circle the item which matches the given position, start from the arrow.

5th       

---

1st       

4-

Use the following pictures, write (✓) to the correct statement and (X) to the incorrect statement.



- The dog is in the second place. ( )
- The first animal is the hen. ( )


**5- Write the amount for the following:**




( Group 3 )

1- Complete:

The number of birds outside the nest is   
and the number of birds inside the nest is .









2- Complete with (above ore below) :









o The cat is  the table.      o The keyboard is  the table.  
o The cat and the ball are  the carpet.

3-

Circle the item which matches the given position, start from the arrow.

3rd      →                                    

6th      →                                    

4-

Use the following pictures, write (✓) to the correct statement and (X) to the incorrect statement.



- The order of the cow is eighth. ( )
- The zebra is in the third place. ( )
- The giraffe is the fourth animal. ( )

**5- Write the amount for the follwing:**

